

Name: _____ Date: _____

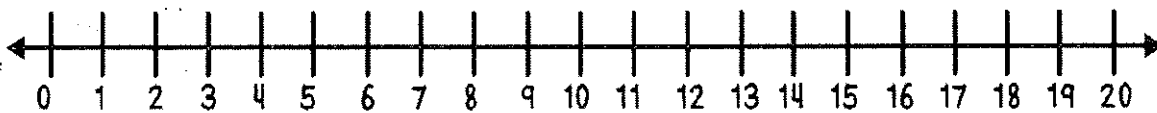
Subtraction
result unknown
- sums to 20

While eating watermelon, I saw 18 seeds. I picked 12 of them out. How many seeds are left?

Draw a picture to show your thinking.

Show your work using ten frames.

Show your thinking on the number line.



Write a number sentence.

___ O ___ O ___

What is your final answer?

Test Your Skills

$$\begin{array}{r} 13 \\ + 0 \\ \hline \end{array}$$

$$\begin{array}{r} 9 \\ + 5 \\ \hline \end{array}$$

$$\begin{array}{r} 8 \\ + 2 \\ \hline \end{array}$$

$$\begin{array}{r} 7 \\ + 4 \\ \hline \end{array}$$

$$\begin{array}{r} 8 \\ + 5 \\ \hline \end{array}$$

$$\begin{array}{r} 6 \\ + 6 \\ \hline \end{array}$$

$$\begin{array}{r} 11 \\ + 0 \\ \hline \end{array}$$

$$\begin{array}{r} 13 \\ + 1 \\ \hline \end{array}$$

$$\begin{array}{r} 9 \\ + 3 \\ \hline \end{array}$$

$$\begin{array}{r} 5 \\ + 4 \\ \hline \end{array}$$

$$\begin{array}{r} 6 \\ + 5 \\ \hline \end{array}$$

$$\begin{array}{r} 8 \\ + 6 \\ \hline \end{array}$$

$$\begin{array}{r} 7 \\ + 7 \\ \hline \end{array}$$

$$\begin{array}{r} 12 \\ + 2 \\ \hline \end{array}$$

$$\begin{array}{r} 9 \\ + 4 \\ \hline \end{array}$$

$$\begin{array}{r} 6 \\ + 4 \\ \hline \end{array}$$

$$\begin{array}{r} 8 \\ + 7 \\ \hline \end{array}$$

$$\begin{array}{r} 5 \\ + 7 \\ \hline \end{array}$$

$$\begin{array}{r} 8 \\ + 4 \\ \hline \end{array}$$

$$\begin{array}{r} 3 \\ + 9 \\ \hline \end{array}$$

$$\begin{array}{r} 12 \\ + 3 \\ \hline \end{array}$$

$$\begin{array}{r} 7 \\ + 3 \\ \hline \end{array}$$

$$\begin{array}{r} 14 \\ + 1 \\ \hline \end{array}$$

$$\begin{array}{r} 10 \\ + 3 \\ \hline \end{array}$$

$$\begin{array}{r} 6 \\ + 5 \\ \hline \end{array}$$

$$\begin{array}{r} 4 \\ + 5 \\ \hline \end{array}$$

$$\begin{array}{r} 5 \\ + 8 \\ \hline \end{array}$$

$$\begin{array}{r} 7 \\ + 6 \\ \hline \end{array}$$

$$\begin{array}{r} 5 \\ + 6 \\ \hline \end{array}$$

$$\begin{array}{r} 6 \\ + 9 \\ \hline \end{array}$$

$$\begin{array}{r} 8 \\ + 3 \\ \hline \end{array}$$


$$\begin{array}{r} 4 \\ + 6 \\ \hline \end{array}$$

$$\begin{array}{r} 10 \\ + 5 \\ \hline \end{array}$$

$$\begin{array}{r} 9 \\ + 2 \\ \hline \end{array}$$

$$\begin{array}{r} 5 \\ + 5 \\ \hline \end{array}$$

$$\begin{array}{r} 6 \\ + 8 \\ \hline \end{array}$$



Accuracy

- I got them all right!
- I missed a couple.
- I will practice these:
(List up to 3 facts.)

Efficiency

- I used these strategies:
- Count Up +1, +2, +3
 - Doubles/Doubles Plus One
 - Tens Partners
 - Plus Ten

Time

I finished in:

My next goal is:



Score: / 10 = %

Name:

1. Is each given equation true or false?

$8 + 4 = 12 + 1$

- (A) true
- (B) false

$9 + 8 = 8 + 9$

- (A) true
- (B) false

2. Write the missing number.

$9 + 4 + 7 = 4 + 7 + \square$

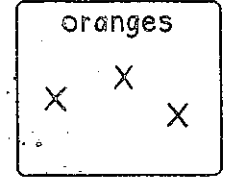


3. $11 - 5 = \underline{\hspace{2cm}}$

$7 + 4 = \underline{\hspace{2cm}}$

$14 - 6 = \underline{\hspace{2cm}}$

$5 + 3 = \underline{\hspace{2cm}}$

Jessie counts the fruit in her house. She put an X under each type of fruit for each piece that she sees.

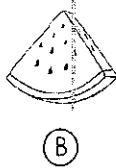
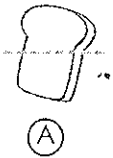


4. What kind of fruit does she have the fewest number of?

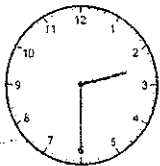
5. How many more bananas does she have than apples?

_____ bananas

1. Mark the food that shows halves.



2. Write the time.



3. $10 - 7 = \underline{\hspace{2cm}}$

$9 + 4 = \underline{\hspace{2cm}}$

$12 - 8 = \underline{\hspace{2cm}}$

$7 + 8 = \underline{\hspace{2cm}}$

4. Zenia made a tower out of blocks. Circle the two solid figures she used to make her tower.



cylinder

sphere

pyramid

cone

5. Kami collects 47 stamps. Her uncle gives her 4 more stamps. How many stamps does she have now?

Answer: _____

Name _____

Date _____

Neighbors Addition Math Facts

1	0	4	8	7
<u>+ 2</u>	<u>+ 1</u>	<u>+ 5</u>	<u>+ 9</u>	<u>+ 8</u>

2	6	5	3	9
<u>+ 3</u>	<u>+ 7</u>	<u>+ 6</u>	<u>+ 4</u>	<u>+ 10</u>

8	7	0	1	4
<u>+ 9</u>	<u>+ 8</u>	<u>+ 1</u>	<u>+ 2</u>	<u>+ 5</u>

3	9	6	2	5
<u>+ 4</u>	<u>+ 10</u>	<u>+ 7</u>	<u>+ 3</u>	<u>+ 6</u>

Name _____

Date _____


Mixed +9 and -9 Math Facts

15	9	16	13	9
<u>-9</u>	<u>+1</u>	<u>-9</u>	<u>-9</u>	<u>+8</u>

19	9	17	9	9
<u>-9</u>	<u>+2</u>	<u>-9</u>	<u>+4</u>	<u>+0</u>

14	11	12	5	9
<u>-9</u>	<u>-9</u>	<u>-9</u>	<u>+9</u>	<u>+3</u>

7	6	18	9	10
<u>+9</u>	<u>+9</u>	<u>-9</u>	<u>+9</u>	<u>-9</u>

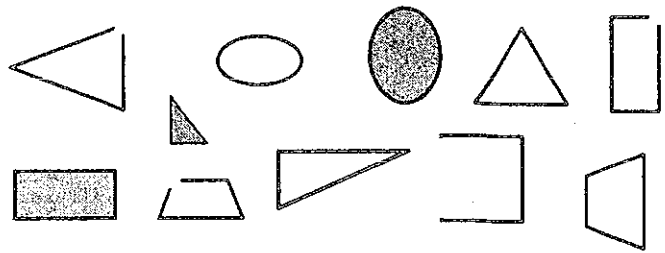


Score: _____ / 10 = _____ % Name: _____


1 Write >, <, or = in each circle.

32 ○ 23	76 ○ 47
81 ○ 83	52 ○ 65

4 Circle all the closed shapes.



2 Write the number of tens and ones. Then write the total number of counters.



tens	ones

_____ counters

5 90 people are at the field to watch the baseball game. If 30 people leave after the 7th inning, how many people are left?


3 $6 + 7 =$ _____ $11 - 7 =$ _____
 $13 - 5 =$ _____ $9 + 5 =$ _____

Answer: _____

1 Is each given equation true or false?

$7 + 1 + 3 = 7 + 1 + 2$ (A) true
 (B) false

1 Tell if each object is shorter or longer than the feather by circling your answer.



shorter
longer



shorter
longer

2 Write the number of tens. Then write the total number of sticks.



_____ tens = _____ total

5 Tomas is 81 years old and Skylar is 76 years old. Who is older?

3 $59 + 10 =$ _____ $36 + 10 =$ _____
 $88 - 10 =$ _____ $41 - 10 =$ _____

Answer: _____

Name _____

Date _____

Leftovers Adding Math Facts #2

$$\begin{array}{r} 3 \\ + 5 \\ \hline \end{array}$$

$$\begin{array}{r} 7 \\ + 5 \\ \hline \end{array}$$

$$\begin{array}{r} 8 \\ + 5 \\ \hline \end{array}$$

$$\begin{array}{r} 7 \\ + 6 \\ \hline \end{array}$$

$$\begin{array}{r} 8 \\ + 6 \\ \hline \end{array}$$

$$\begin{array}{r} 5 \\ + 7 \\ \hline \end{array}$$

$$\begin{array}{r} 6 \\ + 8 \\ \hline \end{array}$$

$$\begin{array}{r} 5 \\ + 3 \\ \hline \end{array}$$

$$\begin{array}{r} 6 \\ + 7 \\ \hline \end{array}$$

$$\begin{array}{r} 5 \\ + 8 \\ \hline \end{array}$$

$$\begin{array}{r} 5 \\ + 3 \\ \hline \end{array}$$

$$\begin{array}{r} 8 \\ + 4 \\ \hline \end{array}$$

$$\begin{array}{r} 3 \\ + 8 \\ \hline \end{array}$$

$$\begin{array}{r} 3 \\ + 6 \\ \hline \end{array}$$

$$\begin{array}{r} 4 \\ + 7 \\ \hline \end{array}$$

$$\begin{array}{r} 4 \\ + 8 \\ \hline \end{array}$$

$$\begin{array}{r} 6 \\ + 3 \\ \hline \end{array}$$

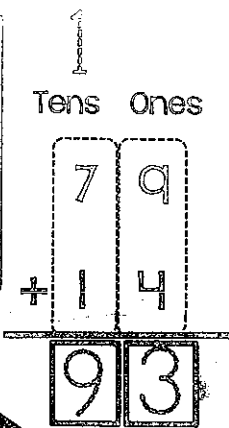
$$\begin{array}{r} 3 \\ + 5 \\ \hline \end{array}$$

$$\begin{array}{r} 7 \\ + 4 \\ \hline \end{array}$$

$$\begin{array}{r} 8 \\ + 3 \\ \hline \end{array}$$

Two-Digit Addition with Regrouping

Finish with the TENS. Add all three numbers: $1 + 7 + 1 = 9$



Start with the ONES. $9 + 4 = 13$

13 has a digit in the ones and the tens. Write the ones digit (3) and carry the tens digit (1) over.



a.

T	O
3	5
+	6
<hr/>	

b.

T	O
4	6
+	7
<hr/>	

c.

T	O
3	7
+	7
<hr/>	

d.

T	O
9	8
+	9
<hr/>	

e.

T	O
6	1
+	9
<hr/>	

1. 49 butterflies were in the garden. Mandy released 28 more butterflies into the garden. How many butterflies are flying around the garden now?

2. Ken has 38 toy cars. Brian gives Ken 12 more. How many cars does Ken have altogether?

Name: _____

Test Your Skills

$$\begin{array}{r} 8 \\ + 7 \\ \hline \end{array}$$

$$\begin{array}{r} 6 \\ + 7 \\ \hline \end{array}$$

$$\begin{array}{r} 5 \\ + 9 \\ \hline \end{array}$$

$$\begin{array}{r} 10 \\ + 5 \\ \hline \end{array}$$

$$\begin{array}{r} 13 \\ + 2 \\ \hline \end{array}$$

$$\begin{array}{r} 7 \\ + 8 \\ \hline \end{array}$$

$$\begin{array}{r} 8 \\ + 5 \\ \hline \end{array}$$

$$\begin{array}{r} 14 \\ + 1 \\ \hline \end{array}$$

$$\begin{array}{r} 15 \\ + 0 \\ \hline \end{array}$$

$$\begin{array}{r} 6 \\ + 8 \\ \hline \end{array}$$

$$\begin{array}{r} 9 \\ + 4 \\ \hline \end{array}$$

$$\begin{array}{r} 11 \\ + 3 \\ \hline \end{array}$$

$$\begin{array}{r} 7 \\ + 6 \\ \hline \end{array}$$

$$\begin{array}{r} 10 \\ + 5 \\ \hline \end{array}$$

$$\begin{array}{r} 9 \\ + 5 \\ \hline \end{array}$$

$$\begin{array}{r} 13 \\ + 1 \\ \hline \end{array}$$

$$\begin{array}{r} 8 \\ + 5 \\ \hline \end{array}$$

$$\begin{array}{r} 7 \\ + 7 \\ \hline \end{array}$$

$$\begin{array}{r} 9 \\ + 6 \\ \hline \end{array}$$

$$\begin{array}{r} 13 \\ + 1 \\ \hline \end{array}$$

$$\begin{array}{r} 12 \\ + 3 \\ \hline \end{array}$$

$$\begin{array}{r} 11 \\ + 2 \\ \hline \end{array}$$

$$\begin{array}{r} 8 \\ + 6 \\ \hline \end{array}$$

$$\begin{array}{r} 10 \\ + 4 \\ \hline \end{array}$$

$$\begin{array}{r} 11 \\ + 4 \\ \hline \end{array}$$

$$\begin{array}{r} 15 \\ + 0 \\ \hline \end{array}$$

$$\begin{array}{r} 12 \\ + 2 \\ \hline \end{array}$$

$$\begin{array}{r} 5 \\ + 8 \\ \hline \end{array}$$

$$\begin{array}{r} 12 \\ + 1 \\ \hline \end{array}$$

$$\begin{array}{r} 12 \\ + 3 \\ \hline \end{array}$$

$$\begin{array}{r} 9 \\ + 4 \\ \hline \end{array}$$


$$\begin{array}{r} 7 \\ + 6 \\ \hline \end{array}$$

$$\begin{array}{r} 11 \\ + 4 \\ \hline \end{array}$$

$$\begin{array}{r} 10 \\ + 3 \\ \hline \end{array}$$

$$\begin{array}{r} 6 \\ + 9 \\ \hline \end{array}$$

$$\begin{array}{r} 13 \\ + 2 \\ \hline \end{array}$$



Accuracy

- I got them all right!
- I missed a couple.
- I will practice these:
(List up to 3 facts.)

Efficiency

I used these strategies:

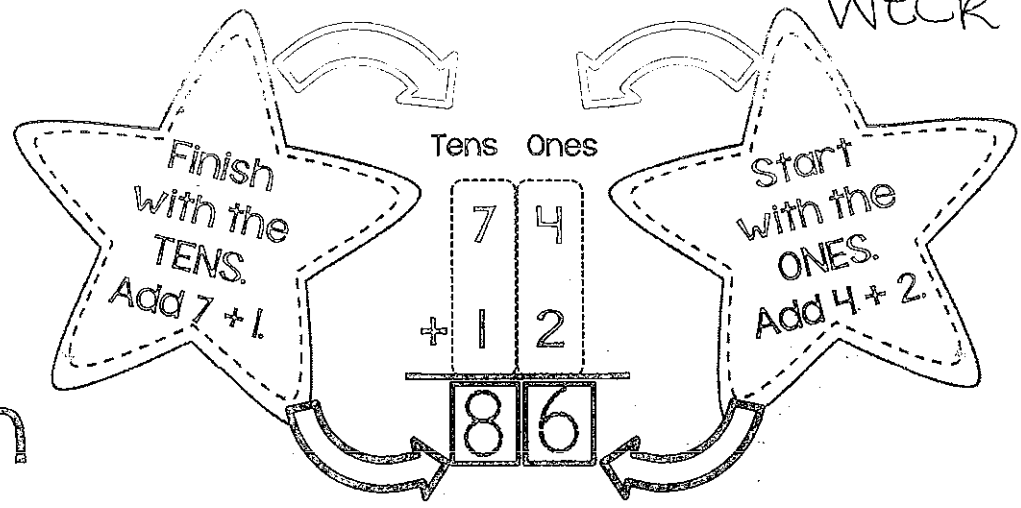
- Count Up +1, +2, +3
- Doubles/Doubles Plus One
- Tens Partners
- Plus Ten

Time

I finished in:

My next goal is:

Two-Digit Addition



a.

T	O
8	3
+	4
<hr/>	

b.

T	O
1	7
+	2
2	
<hr/>	

c.

T	O
4	1
+	3
2	
<hr/>	

d.

T	O
6	0
+	2
4	
<hr/>	

e.

T	O
4	3
+	5
6	
<hr/>	

f.

T	O
8	1
+	3
<hr/>	

g.

T	O
3	4
+	4
0	
<hr/>	

h.

T	O
3	3
+	5
6	
<hr/>	

i.

T	O
7	0
+	2
0	
<hr/>	

j.

T	O
8	2
+	6
<hr/>	

- Kim found 55 seashells on the beach. Jen gave Kim 31 of her seashells. How many seashells does she now have? (Show your work in expanded form)
- Lane saw 15 birds flying around the school. At recess he saw 12 more birds. How many birds did Lane see in all? (Show your work in expanded form)

Test Your Skills

$$\begin{array}{r} 11 \\ + 1 \\ \hline \end{array}$$

$$\begin{array}{r} 3 \\ + 8 \\ \hline \end{array}$$

$$\begin{array}{r} 10 \\ + 2 \\ \hline \end{array}$$

$$\begin{array}{r} 11 \\ + 0 \\ \hline \end{array}$$

$$\begin{array}{r} 4 \\ + 6 \\ \hline \end{array}$$

$$\begin{array}{r} 12 \\ + 0 \\ \hline \end{array}$$

$$\begin{array}{r} 5 \\ + 5 \\ \hline \end{array}$$

$$\begin{array}{r} 3 \\ + 7 \\ \hline \end{array}$$

$$\begin{array}{r} 7 \\ + 5 \\ \hline \end{array}$$

$$\begin{array}{r} 8 \\ + 3 \\ \hline \end{array}$$

$$\begin{array}{r} 5 \\ + 7 \\ \hline \end{array}$$

$$\begin{array}{r} 5 \\ + 6 \\ \hline \end{array}$$

$$\begin{array}{r} 2 \\ + 8 \\ \hline \end{array}$$

$$\begin{array}{r} 4 \\ + 7 \\ \hline \end{array}$$

$$\begin{array}{r} 9 \\ + 1 \\ \hline \end{array}$$

$$\begin{array}{r} 7 \\ + 4 \\ \hline \end{array}$$

$$\begin{array}{r} 6 \\ + 5 \\ \hline \end{array}$$

$$\begin{array}{r} 3 \\ + 9 \\ \hline \end{array}$$

$$\begin{array}{r} 12 \\ + 0 \\ \hline \end{array}$$

$$\begin{array}{r} 4 \\ + 6 \\ \hline \end{array}$$

$$\begin{array}{r} 8 \\ + 4 \\ \hline \end{array}$$

$$\begin{array}{r} 6 \\ + 4 \\ \hline \end{array}$$

$$\begin{array}{r} 5 \\ + 5 \\ \hline \end{array}$$

$$\begin{array}{r} 8 \\ + 2 \\ \hline \end{array}$$

$$\begin{array}{r} 10 \\ + 2 \\ \hline \end{array}$$

$$\begin{array}{r} 6 \\ + 6 \\ \hline \end{array}$$

$$\begin{array}{r} 10 \\ + 1 \\ \hline \end{array}$$

$$\begin{array}{r} 11 \\ + 0 \\ \hline \end{array}$$

$$\begin{array}{r} 10 \\ + 2 \\ \hline \end{array}$$

$$\begin{array}{r} 4 \\ + 8 \\ \hline \end{array}$$

$$\begin{array}{r} 7 \\ + 3 \\ \hline \end{array}$$

$$\begin{array}{r} 4 \\ + 7 \\ \hline \end{array}$$

$$\begin{array}{r} 8 \\ + 3 \\ \hline \end{array}$$

$$\begin{array}{r} 6 \\ + 5 \\ \hline \end{array}$$

$$\begin{array}{r} 7 \\ + 5 \\ \hline \end{array}$$

$$\begin{array}{r} 9 \\ + 3 \\ \hline \end{array}$$

How am I doing?

Accuracy

- I got them all right!
- I missed a couple.
- I will practice these:
(List up to 3 facts.)

Efficiency

I used these strategies:

- Count Up +1, +2, +3
- Doubles/Doubles Plus One
- Tens Partners
- Plus Ten

Time

I finished in:

My next goal is: