








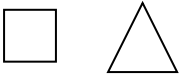







July 2022 – Kindergarten Summer Math Calendar

				<p>1 Make an ABC pattern with coins. How much money did you use?</p> 
<p>4 There are 5 marbles in a jar. I put 3 more marbles in the jar. How many marbles are in the jar now? Solve this problem and make up other ones for your family and friends to solve.</p>	<p>5 Skip count to 30 by twos. Did you count the even or odd numbers? You can use a calendar to help you.</p>	<p>6 Using a ruler, find 4 things in your house that are exactly 12 inches long.</p> 	<p>7 Which is less? a) 10 or 14 b) 6 or 9 c) 19 or 17 d) 23 or 19</p>	<p>8 Money Hungry Game Put an assortment of coins into a bowl and stir. Scoop some coins out and count the total value.</p>
<p>11 Draw clocks to show these times: 12:30, 2:00, 5:00, 9:30, 4:00, 6:30</p> 	<p>12 Write the number words 1 –10. Cut them apart and put them in order from greatest to least.</p>	<p>13 Use coins to show someone 15¢, 8¢, 20¢, 5¢.</p> 	<p>14 Count to 100 by twos. Now write the numbers.</p> 	<p>15 Make these patterns using leaves: AB, AAB, ABC.</p> 
<p>18 Count the money in your mom or dad's pocket or wallet.</p> 	<p>19 Starting at one, write the numbers as high as you can go. Stop if you get to 100.</p> 	<p>20 Arrange the fruit in your house from heaviest to lightest. Arrange the fruit from longest to shortest.</p> 	<p>21 Draw these shapes:  Color $\frac{1}{3}$ of each shape.</p>	<p>22 Use a pasta noodle to measure 5 things in your house. Arrange them from shortest to longest.</p> 
<p>25 I am thinking of a number between 10 and 100 that has one 9 in it. What might my number be?</p> 	<p>26 Create your own story problem. Ask your parents to solve your problem</p> 	<p>27 Put a handful of pennies into groups of 10. How many groups do you have?</p> 	<p>28 Draw clocks to show these times: 3:00, 5:30, 1:00, 11:30, 6:00, 10:30.</p> 	<p>29 Write the age of each person who lives with you. Order them from least to greatest.</p> 