




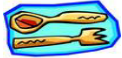











June 2022 – Second Grade Summer Math Calendar

		<p>1 Set out 4 bowls. Put the same number of objects in each bowl. How many objects are in each bowl? Write an addition sentence to show how many objects are in all 4 bowls</p>	<p>2 If you have red marbles in a bag mixed with yellow marbles, what is the fewest number you would have to pull from the bag to have two of the same color?</p>	<p>3 One way to make 12 is $8 + 4$. Write 4 other addition facts for 12</p> 
<p>6 Write the missing numbers on the lines below: 12, 15, 18, _____, _____, _____ 8, 12, 16, _____, _____, _____</p>	<p>7 One way to make 12 is $8 + 4$. Write 4 other addition facts for 12.</p> 	<p>8 Using a group of different coins, sort the coins into groups of the same kind. How much is in each group?</p> 	<p>9 One way to make 9 is $18 - 9$. Write 4 other subtraction sentences that have an answer of 9.</p> 	<p>10 Using the numbers 63, 18, 30, 49, tell which two numbers you would add to get the greatest sum.</p> 
<p>13 Look for a pattern in the times listed below. Complete the pattern by filling in the lines. 2:18, 2:22, 2:26, _____, _____</p>	<p>14 Count the number of forks and spoons in your kitchen. How many do you have in all?</p> 	<p>15 One way to make 15 is $8 + 7$. Write 4 other ways to make 15.</p> 	<p>16 Using coins, show 2 ways to make 25 cents, 40 cents, 38 cents, and 78 cents.</p> 	<p>17 Identify the rule for each pattern and then continue the pattern: 5, 7, 9, 13, _____, _____ 75, 80, 85, 90, _____, _____</p>
<p>20 Make a list of the ages of each family member. Round each family member's age to the nearest ten.</p> 	<p>21 Add the ages of each of your family members together. What is the sum?</p> 	<p>22 Write the numbers below in expanded form. (Ex., $345 = 300 + 40 + 5$) 836, 203, 427, 650</p>	<p>23 Gather five different boxes of food such as rice or cereal. Measure the height of each box in inches and centimeters. Which box is the tallest? Which box is the shortest?</p> 	<p>24 Read a book for 15 minutes today, tomorrow, and the next day, then find out how many minutes you read in all.</p> 
<p>27 Fill a container with buttons or marbles. Guess how much they weigh and then weigh them. By how much was your guess different than the real weight?</p> 	<p>28 Sue swims in the pool from 1:10 to 1:35. Draw a clock to show the time at which she began to swim.</p> 	<p>29 If you have a total of 16 coins and divide them into evenly numbered stacks, how many coins would be in each stack? How much money would you have in each stack?</p> 	<p>30 Look at a calendar. On what days of the week do the 5th, 13th, 26th and 30th fall?</p> 